

Name: _____

Date: _____

Life Science

Period: _____

Section A-3.2: Cell division is part of the cell cycle.

Fill in the information below with the name of the phase of mitosis, a brief description of the events that occur during that phase and a diagram illustrating what the cell looks like during each phase of mitosis.


~Remember to label the nuclear membrane, chromosomes, chromatids, and cell membrane for each diagram.~

Phase of Cell Cycle


Description of Events

Diagram

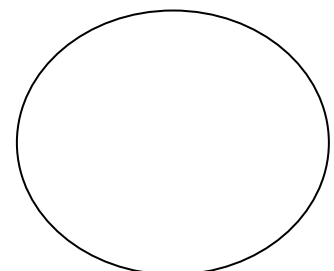
Preparation for mitosis:



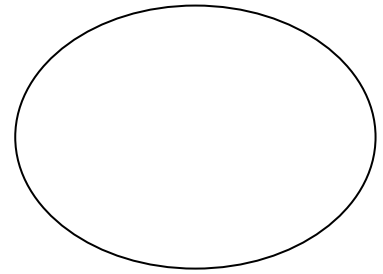
1. _____



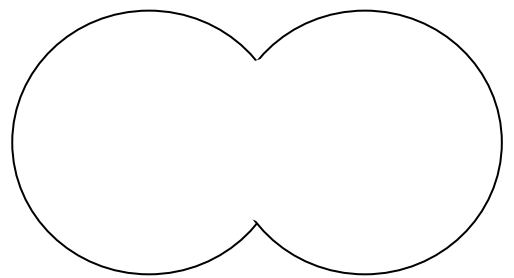
2. _____



3. _____



4. _____



Cytokinesis

